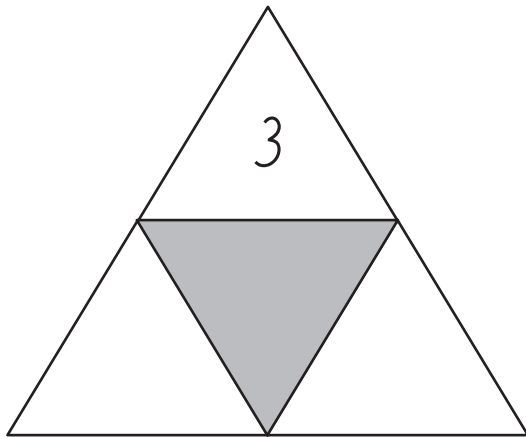


Laskuperhelaskut

I. Keksi kolmion puuttuvat luvut. Kirjoita kaksi yhteenlaskua ja kaksi vähennyslaskua.

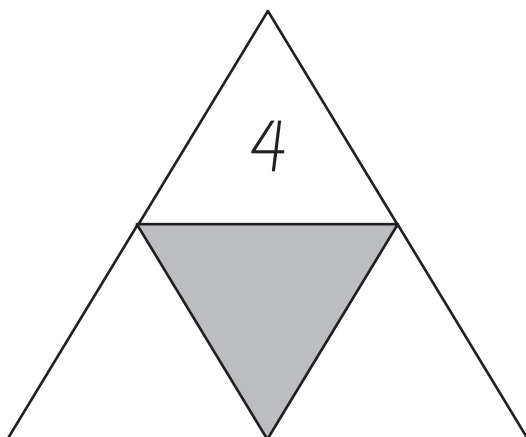


	+		=	
--	---	--	---	--

	+		=	
--	---	--	---	--

	-		=	
--	---	--	---	--

	-		=	
--	---	--	---	--

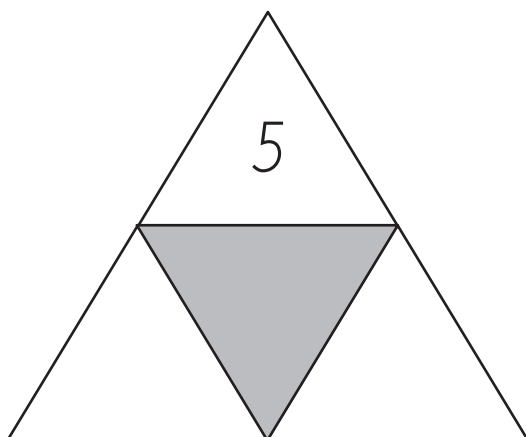


	+		=	
--	---	--	---	--

	+		=	
--	---	--	---	--

	-		=	
--	---	--	---	--

	-		=	
--	---	--	---	--



	+		=	
--	---	--	---	--

	+		=	
--	---	--	---	--

	-		=	
--	---	--	---	--

	-		=	
--	---	--	---	--