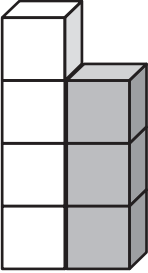
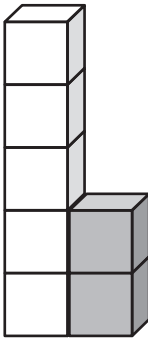
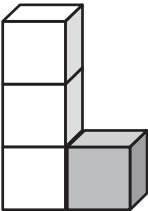


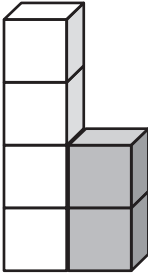
Lukujen välinen ero

1. Rakenna samanlaiset tornit kuin kuvassa.
 Ratkaise kuinka monta palikkaa on tornien ero?



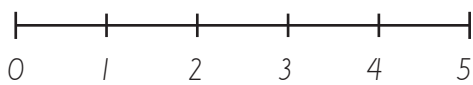
$$\begin{array}{|c|c|c|c|c|} \hline \square & - & \square & = & \square \\ \hline \square & & \square & & \square \\ \hline \end{array}$$


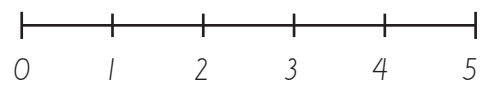
$$\begin{array}{|c|c|c|c|c|} \hline \square & - & \square & = & \square \\ \hline \square & & \square & & \square \\ \hline \end{array}$$


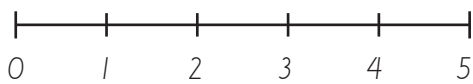
$$\begin{array}{|c|c|c|c|c|} \hline \square & - & \square & = & \square \\ \hline \square & & \square & & \square \\ \hline \end{array}$$


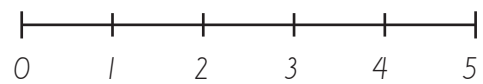
$$\begin{array}{|c|c|c|c|c|} \hline \square & - & \square & = & \square \\ \hline \square & & \square & & \square \\ \hline \end{array}$$

2. Merkitse laskun luvut lukusuoralle (X). Kuinka paljon on lukujen välinen ero?



$$\begin{array}{|c|c|c|c|c|} \hline 4 & - & 1 & = & \square \\ \hline \end{array}$$


$$\begin{array}{|c|c|c|c|c|} \hline 4 & - & 3 & = & \square \\ \hline \end{array}$$


$$\begin{array}{|c|c|c|c|c|} \hline 5 & - & 3 & = & \square \\ \hline \end{array}$$


$$\begin{array}{|c|c|c|c|c|} \hline 5 & - & 1 & = & \square \\ \hline \end{array}$$