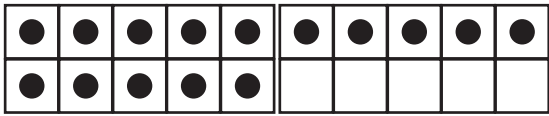
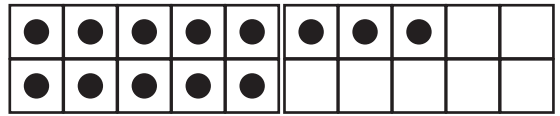


# Lukumäärä-luku 11–20

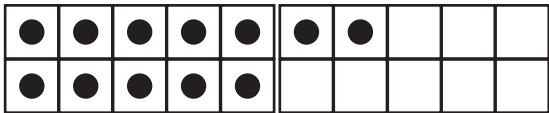
1. Yhdistä viivalla lukumäärä ja luku.




11




12




13



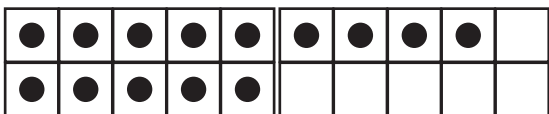
14



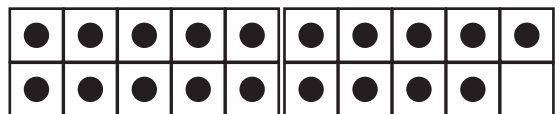
15



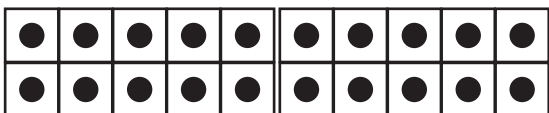
16



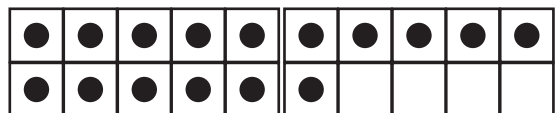
17



18



19



20

2. Kirjoita puuttuva luku.

a) 10 ja 8 on _____	d) 10 ja _____ on 17	g) _____ ja 10 on 13
b) 10 ja 4 on _____	e) 10 ja _____ on 12	h) _____ ja 10 on 11
c) 10 ja 9 on _____	f) 10 ja _____ on 16	i) _____ ja 10 on 15