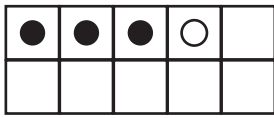
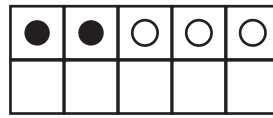


Lukumäärien yhdistäminen

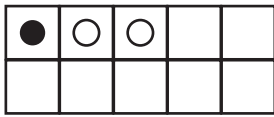
I. Laske kuinka monta palloja on yhteensä?



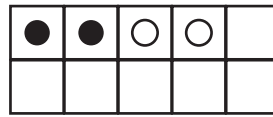
$$\begin{array}{c} \square \\ \bullet \end{array} \text{ ja } \begin{array}{c} \square \\ \circ \end{array} \text{ on } \square$$



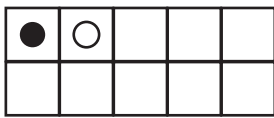
$$\begin{array}{c} \square \\ \bullet \end{array} \text{ ja } \begin{array}{c} \square \\ \circ \end{array} \text{ on } \square$$



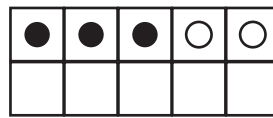
$$\begin{array}{c} \square \\ \bullet \end{array} \text{ ja } \begin{array}{c} \square \\ \circ \end{array} \text{ on } \square$$



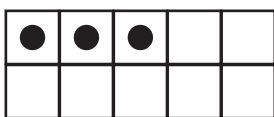
$$\begin{array}{c} \square \\ \bullet \end{array} \text{ ja } \begin{array}{c} \square \\ \circ \end{array} \text{ on } \square$$



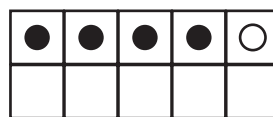
$$\begin{array}{c} \square \\ \bullet \end{array} + \begin{array}{c} \square \\ \circ \end{array} = \square$$



$$\begin{array}{c} \square \\ \bullet \end{array} + \begin{array}{c} \square \\ \circ \end{array} = \square$$



$$\begin{array}{c} \square \\ \bullet \end{array} + \begin{array}{c} \square \\ \circ \end{array} = \square$$



$$\begin{array}{c} \square \\ \bullet \end{array} + \begin{array}{c} \square \\ \circ \end{array} = \square$$