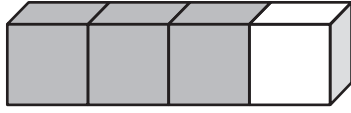


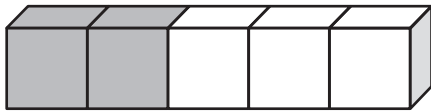
Vaihdannaisuus yhteenlaskussa

1. Rakenna samanlainen. Mitkä kaksi laskua palikoista saadaan? Ratkaise laskut.



	+		=	
--	---	--	---	--

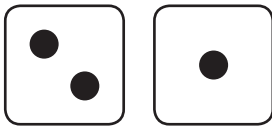
	+		=	
--	---	--	---	--



	+		=	
--	---	--	---	--


	+		=	
--	---	--	---	--

2. Mitkä kaksi laskua nopista saadaan? Ratkaise laskut.



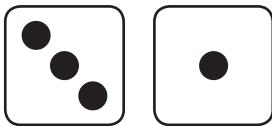
	+		=	
--	---	--	---	--

	+		=	
--	---	--	---	--




	+		=	
--	---	--	---	--

	+		=	
--	---	--	---	--



	+		=	
--	---	--	---	--

	+		=	
--	---	--	---	--



	+		=	
--	---	--	---	--

	+		=	
--	---	--	---	--