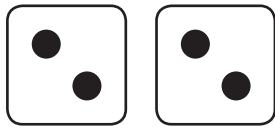



Doubles


1. Write the addition equations.




	+		=	
--	---	--	---	--



	+		=	
--	---	--	---	--



	+		=	
--	---	--	---	--



	+		=	
--	---	--	---	--

2. Solve the addition problems as quickly and accurately as possible.



$1 + 1 = \underline{\quad}$

$3 + 3 = \underline{\quad}$

$2 + 2 = \underline{\quad}$

$2 + 2 = \underline{\quad}$

$4 + 4 = \underline{\quad}$

$5 + 5 = \underline{\quad}$

$3 + 3 = \underline{\quad}$

$1 + 1 = \underline{\quad}$

$4 + 4 = \underline{\quad}$

$5 + 5 = \underline{\quad}$

$2 + 2 = \underline{\quad}$

$3 + 3 = \underline{\quad}$

$1 + 1 = \underline{\quad}$

$4 + 4 = \underline{\quad}$

$5 + 5 = \underline{\quad}$

